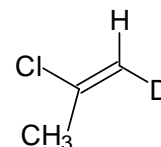
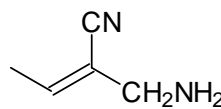
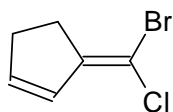
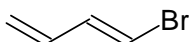
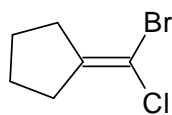


B

Student ID _____

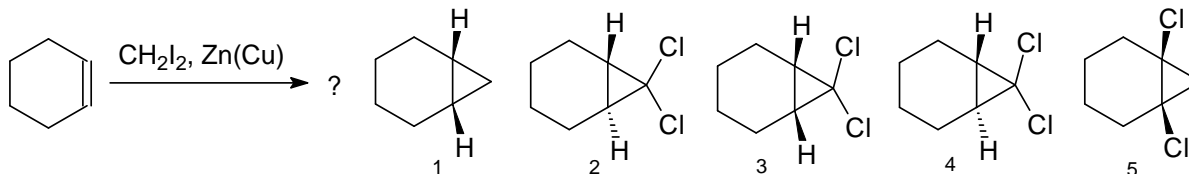
MARK ONE ANSWER FOR EACH QUESTION ON BOTH THE EXAM AND YOUR SCANTRON!

1. How many of these are E isomers?



A. one B. two C. three D. four E. all

2. What is the most likely outcome of the reaction below?



A. Compound 1 B. Compound 2 C. Compound 3 D. Compound 4
E. Compound 5

3. What is the correct formula for sodium borohydride?

A. NaBH_2 B. NaBH_4 C. Na_2BH_4 D. NaBH_3 E. NaB_2H_4

4. This is version B. Please mark B on your scantron!

Key qu230-01_2_101b:

1. C
2. A
3. B