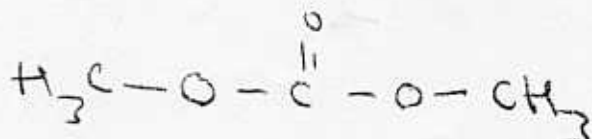
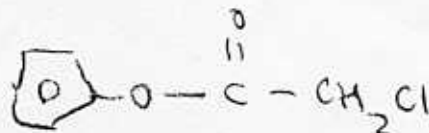
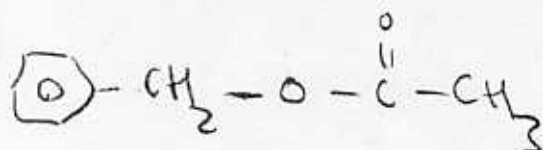


1. Show valid structural formulas for the following esters: a) benzyl acetate, b) phenyl chloroacetate, c) dimethyl carbonate (6 pts)



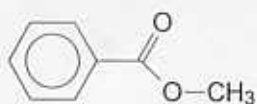
2. Show a balanced reaction equation for last week's experiment! (3 pts)



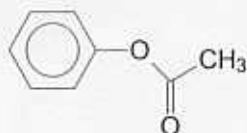
3. Name two organic reactants you will need today! (2 pts)

aniline, 1-chloro-2,4-dinitrobenzene

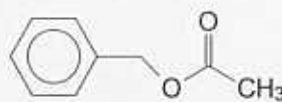
4. Name the esters shown below! (4 pts)



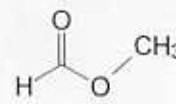
a



b



c



d

a methylbenzoate b phenyl acetate

c benzyl acetate d methylformate